


«Ασκήσεις στα Μαθηματικά...»




1) Κυκλώνω τη σωστή ώρα για κάθε ρολόι.



3 : 05

2 : 55


3 : 00



10 : 15

10 : 00


10 : 10



8 : 20

8 : 15


7 : 25



11 : 15

8 : 55


8 : 50



9 : 35

5 : 50

9 : 25



5 : 40

6 : 40


8 : 40



6 : 30

7 : 30


8 : 30



2 : 30

12 : 30


1 : 30



12 : 15

12 : 45

11 : 15

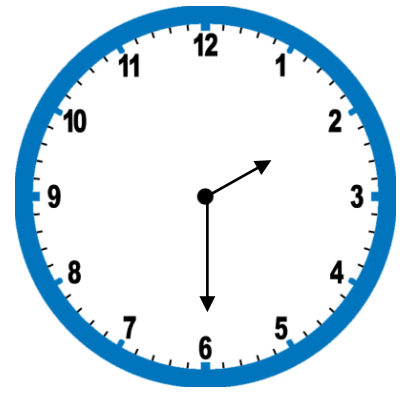
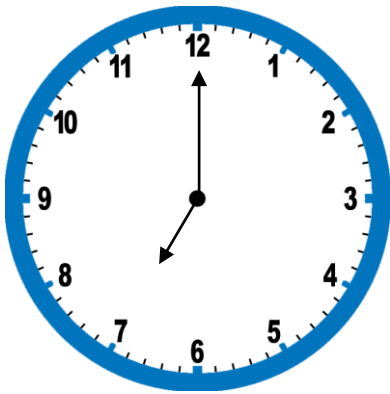


4 : 15

4 : 45

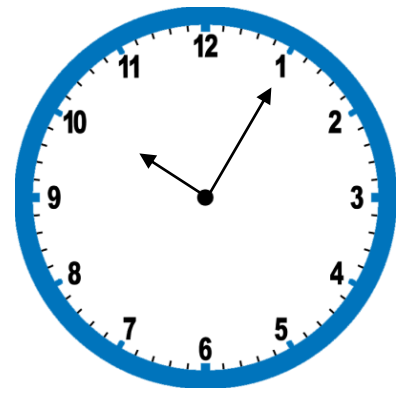
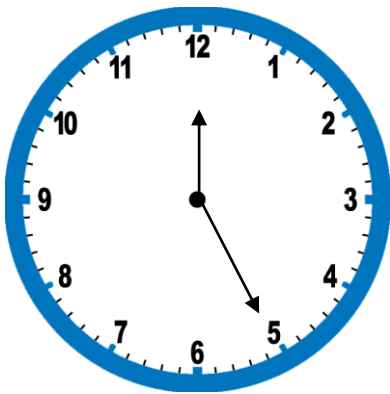
9 : 15

2) Βοηθώ τον Ντάφι να γράψει με λέξεις τι ώρα δείχνει το ρολόι.



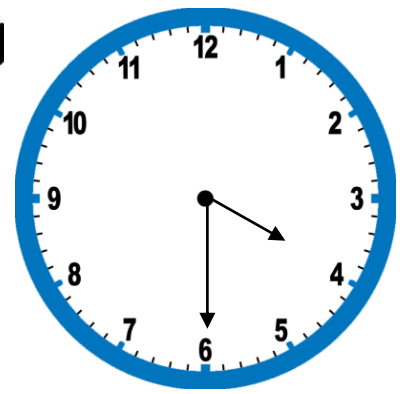
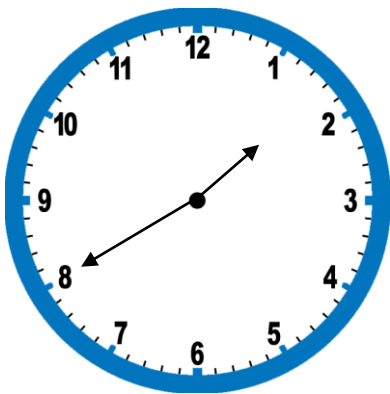
.....
.....

.....
.....



.....
.....

.....
.....



.....
.....

.....
.....